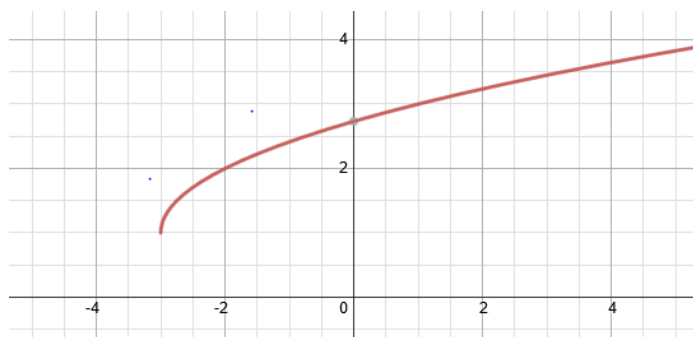
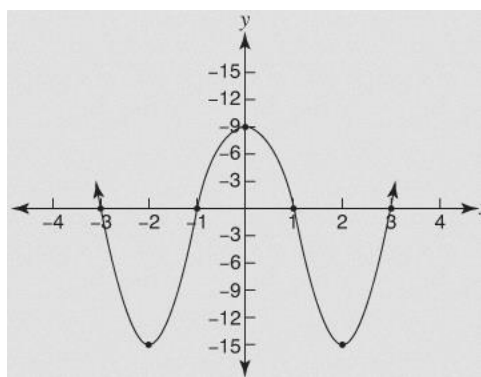


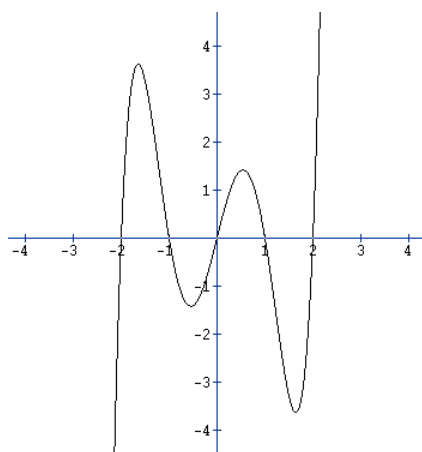
### Function Characteristics



Domain	_____	X Intercepts	_____
Range	_____	Y Intercepts	_____
Relative Maximums	_____	End Behavior	$as x \rightarrow \infty, y \rightarrow$
Relative Minimums	_____		$as x \rightarrow -\infty, y \rightarrow$
Increasing Intervals	_____	Decreasing Intervals	_____



Domain	_____	X Intercepts	_____
Range	_____	Y Intercepts	_____
Relative Maximums	_____	End Behavior	$as x \rightarrow \infty, y \rightarrow$
Relative Minimums	_____		$as x \rightarrow -\infty, y \rightarrow$
Increasing Intervals	_____	Decreasing Intervals	_____



Domain	_____	X Intercepts	_____
Range	_____	Y Intercepts	_____
Relative Maximums	_____	End Behavior	$as x \rightarrow \infty, y \rightarrow$
Relative Minimums	_____		$as x \rightarrow -\infty, y \rightarrow$
Increasing Intervals	_____	Decreasing Intervals	_____

Vocabulary

<b>DECREASING INTERVAL</b>	
<b>DEPENDANT VARIABLE</b>	
<b>DOMAIN</b>	
<b>END BEHAVIOR</b>	
<b>INCREASING INTERVAL</b>	
<b>INDEPENDENT VARIABLE</b>	
<b>INTERCEPTS (X and Y)</b>	
<b>RANGE</b>	
<b>RELATIVE MAXIMUM</b>	
<b>RELATIVE MINIMUM</b>	